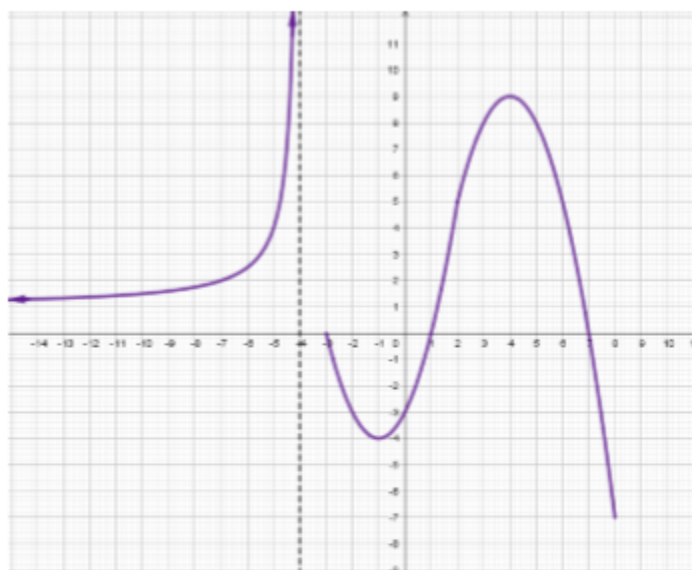


FUNCTIONS TEST - 4º ESO

Exercise 1: (1.5 pts) Given the following graph of a certain function (the distance between consecutive marks in the axes is one):



- a) Indicate the domain and the image $\text{Dom } f = (-\infty, -4) \cup [-3, 8]$ $\text{Im } f = [-7, +\infty)$
- b) Study the monotony **Increases:** $(-\infty, -4) \cup (-1, 4)$ **Decreases:** $(-3, -1) \cup (4, 8)$
- c) Indicate the relative and absolute extrema
Relative maxima: $x = -3, x = 4$ **Absolute maximum:** $\cancel{4}$
Relative minima: $x = -1, x = 8$ **Absolute minimum:** $x = 8$

Exercise 2: (2 pts) Find the domain of the following functions:

a) $f(x) = \frac{x^2 + 7x + 6}{x^2 - 9} \rightarrow \text{Dom } f = \mathbb{R} - \{\pm 3\}$ (0.5)

b) $f(x) = \frac{1}{\sqrt{x^2 + x - 6}} \rightarrow \text{Dom } f = (-\infty, -3) \cup (2, +\infty)$ (0.75)

c) $f(x) = \frac{\sqrt{x+1}}{x^2 - 4} \rightarrow \text{Dom } f = [-1, 2) \cup (2, +\infty)$ (0.75)

Exercise 3: (2 pts) Work out:

a) $\lim_{x \rightarrow 2} \frac{1-x}{x-2} = \cancel{4}$ (0.5)

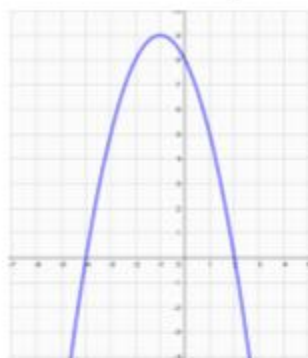
b) $\lim_{x \rightarrow 1} \frac{x^2 - 2x + 1}{x^2 + 2x - 3} = 0$ (0.75)

c) $\lim_{x \rightarrow +\infty} \left(\frac{x^2 - 2x}{x+1} - x \right) = -3$ (0.75)



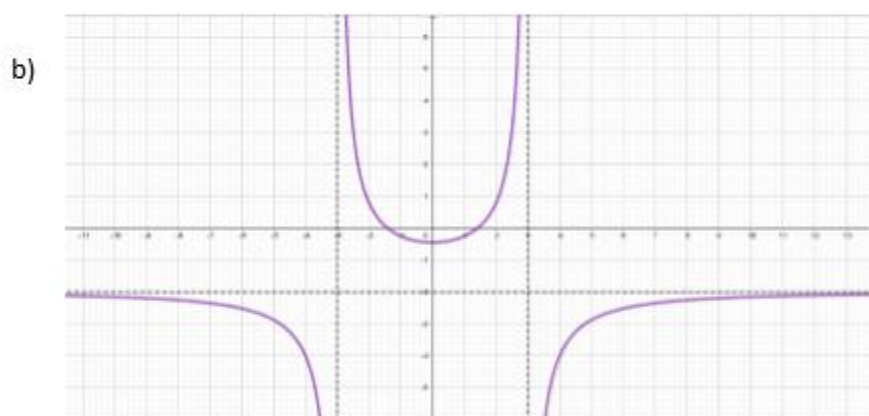
Exercise 4: (0.75 pts) Find the **general** equation of the straight line that goes through the points $A(-7,2)$ and $B(5,4)$ $x-6y+19=0$

Exercise 5: (1 pto) Plot the graph of the function $f(x) = -x^2 - 2x + 8$, finding the points where it crosses the axes, the coordinates of the vertex and as many more points as necessary



Exercise 6: (1 pto) Find the asymptotes of the following functions:

a) $f(x) = \frac{3x^2 - 7x + 1}{x^2 - 25} \rightarrow \begin{cases} \text{HA} & y = 3 \\ \text{VA} & x = \pm 5 \end{cases}$



$\begin{cases} \text{HA} & y = -2 \\ \text{VA} & x = \pm 5 \end{cases}$

Exercise 7: (1.75 pts) Sketch the graph of the piecewise function:

$$f(x) = \begin{cases} x+3 & x \leq -1 \\ x^2 - 4 & -1 < x < 3 \\ 5 & 3 \leq x < 7 \end{cases}$$

